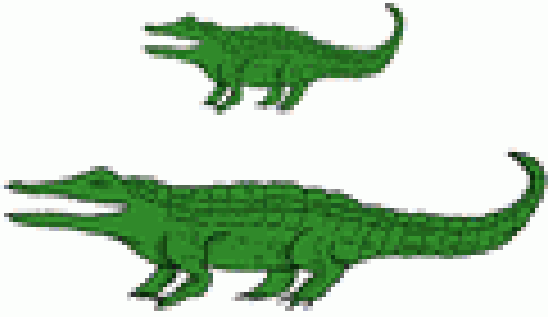









MINISTRY OF EDUCATION  
PRIMARY ENGAGEMENT PROGRAMME  
GRADE ONE WORKSHEET  
SUBJECT: MATHEMATICS  
LESSON: REVIEW WEEK 11  
TOPIC: MEASUREMENT




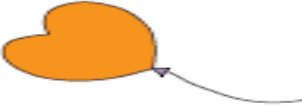


Name \_\_\_\_\_ Date \_\_\_\_\_

1. Look at the pictures in the boxes. Answer the question by circling the correct picture.

 <p>Which is shorter?</p>	 <p>Which is longer?</p>
 <p>Which is taller?</p>	 <p>Which has a longer tail?</p>

 <p>Which has shorter ears?</p>	 <p>Which has a longer neck?</p>
--	--

**2. Tick the correct choice that describes the weight of each object.**

<p>1)</p>  <p><input type="checkbox"/> Heavy <input type="checkbox"/> Light</p>	<p>2)</p>  <p><input type="checkbox"/> Heavy <input type="checkbox"/> Light</p>
<p>3)</p>  <p><input type="checkbox"/> Heavy <input type="checkbox"/> Light</p>	<p>4)</p>  <p><input type="checkbox"/> Heavy <input type="checkbox"/> Light</p>
<p>5)</p>  <p><input type="checkbox"/> Heavy <input type="checkbox"/> Light</p>	<p>6)</p>  <p><input type="checkbox"/> Heavy <input type="checkbox"/> Light</p>